

PHY 113 A General Physics I
9-9:50 AM MWF Olin 101

Plan for Lecture 10:

Chapter 6 -- Newton's Laws continued

- 1. Newton's Laws and centripetal acceleration**
- 2. Newton's Laws and resistive forces**

9/21/2012

PHY 113 A Fall 2012 -- Lecture 10

1

		Topic	Section	Section	
5	09/07/2012	Motion in 2d	4.1-4.3	4.3, 4.50	09/10/2012
6	09/10/2012	Circular motion	4.4-4.6	4.29, 4.30	09/12/2012
7	09/12/2012	Newton's laws	5.1-5.6	5.1, 5.13	09/14/2012
8	09/14/2012	Newton's laws applied	5.7-5.8	5.20, 5.30, 5.45	09/17/2012
	09/17/2012	Review	1-5		
	09/19/2012	Exam	1-5		
9	09/21/2012	More applications of Newton's laws	6.1-6.4	6.3, 6.14	09/24/2012
10	09/24/2012	Work	7.1-7.4	7.1, 7.15	09/26/2012
11	09/26/2012	Kinetic energy	7.5-7.9	7.31, 7.41, 7.49	09/28/2012
12	09/28/2012	Conservation of energy	8.1-8.5		10/01/2012
13	10/01/2012	Momentum and collisions	9.1-9.4		10/03/2012

9/21/2012

PHY 113 A Fall 2012 -- Lecture 10

2

iclicker exercise:

Exam feedback:

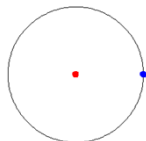
- A. Too hard**
- B. Too easy**
- C. Neutral**

9/21/2012

PHY 113 A Fall 2012 -- Lecture 10

3

Recall: Uniform circular motion:



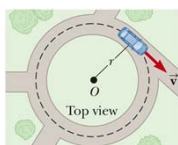
animation from
<http://mathworld.wolfram.com/UniformCircularMotion.html>

9/10/2012

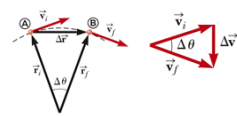
PHY 113 A, Fall 2012 – Lecture 6

4

Uniform circular motion – continued

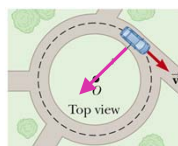


a



b

c



a

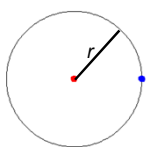
If $v_i = v_f \equiv v$, then the acceleration
 in the radial direction and the
 centripetal acceleration is :

$$\mathbf{a}_c = -\frac{v^2}{r} \hat{\mathbf{r}}$$

PHY 113 A, Fall 2012 – Lecture 6

5

Uniform circular motion – continued



$$\mathbf{a}_c = -\frac{v^2}{r} \hat{\mathbf{r}}$$

$$\mathbf{a}_c = -\left(\frac{2\pi}{T}\right)^2 r \hat{\mathbf{r}}$$

$$\mathbf{a}_c = -(2\pi f)^2 r \hat{\mathbf{r}}$$

In terms of time period T for one cycle:

$$v = \frac{2\pi r}{T}$$

In terms of the frequency f of complete cycles:

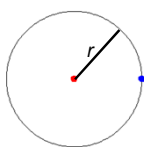
$$f = \frac{1}{T}; \quad v = 2\pi f r$$

9/10/2012

PHY 113 A, Fall 2012 – Lecture 6

6

Uniform circular motion and Newton's second law



$$\mathbf{F} = m\mathbf{a}$$

$$\mathbf{a}_c = -\frac{v^2}{r}\hat{\mathbf{r}}$$



iclicker exercise:

For uniform circular motion

- A. Newton's laws are repealed
- B. There is a force pointing radially **outward** from the circle
- C. There is a force pointing radially **inward** to the circle

9/10/2012

PHY 113 A, Fall 2012 – Lecture 6

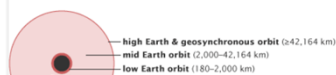
7

Example of uniform circular motion:

<http://earthobservatory.nasa.gov/Features/OrbitsCatalog/page1.php>

There are essentially three types of Earth orbits: high Earth orbit, medium Earth orbit, and low Earth orbit. Many weather and some communications satellites tend to have a high Earth orbit, farthest away from the surface. Satellites that orbit in a medium (mid) Earth orbit include navigation and specialty satellites, designed to monitor a particular region. Most scientific satellites, including NASA's Earth Observing System fleet, have a low Earth orbit.

Flying hundreds of kilometers above the Earth, the **International Space Station** and other orbiting satellites provide a unique perspective on our planet. (NASA Photograph S126-E-014918.)



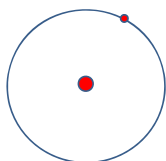
lunar orbit (384,000 km)

9/21/2012

PHY 113 A, Fall 2012 – Lecture 10

8

Example of uniform circular motion: Consider the moon in orbit about the Earth



Mass of Moon: $M_M = 7.35 \times 10^{22} \text{ kg}$

Distance from center of Earth: $R_M = 3.84 \times 10^8 \text{ m}$

Rotational period of Moon: $T = 27.3 \text{ days} = 2.36 \times 10^6 \text{ s}$

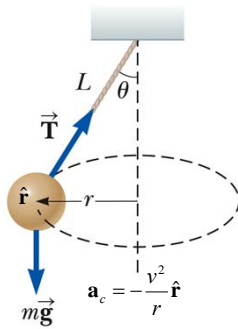
$$|a_c| = \left(\frac{2\pi}{T}\right)^2 R_M = 2.72 \times 10^{-3} \text{ m/s}^2$$

Newton's Second Law $\Rightarrow F = M_M a_c = 2.0 \times 10^{20} \text{ N}$

9/21/2012

PHY 113 A, Fall 2012 – Lecture 10

9

Example of uniform circular motion:

Vertical component of

Newton's second law :

$$T \cos \theta - mg = 0$$

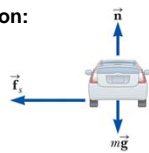
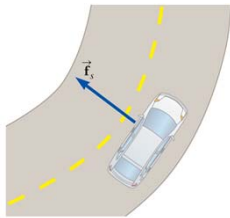
Horizontal (radial) component
of Newton's second law :

$$T \sin \theta = ma_c = \frac{mv^2}{r} = \frac{mv^2}{L \sin \theta}$$

9/21/2012

PHY 113 A Fall 2012 -- Lecture 10

10

Example of uniform circular motion:Horizontal (radial) component
of Newton's second law :

$$f = ma_c = \frac{mv^2}{r}$$

Maximum condition :

Vertical component of

Newton's second law :

$$n - mg = 0 \quad n = mg$$

$$\mu_s n = \mu_s mg \geq \frac{mv^2}{r} \Rightarrow v_{\max} = \sqrt{\mu_s gr}$$

9/21/2012

PHY 113 A Fall 2012 -- Lecture 10

11

Curved road continued:

$$v_{\max} = \sqrt{\mu_s gr}$$

Example: $\mu_s = 0.5$

$$r = 35m$$

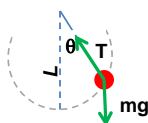
$$v_{\max} = \sqrt{\mu_s gr} = \sqrt{0.5 \cdot 9.8 \cdot 35} m/s$$

$$= 13.1 m/s = 29 mi/hr$$

9/21/2012

PHY 113 A Fall 2012 -- Lecture 10

12

Mass on a swing:**iclicker exercise:**

Which of these statements about the tension T in the rope is true?

- A. T is the same for all θ .
- B. T is smallest for $\theta=0$.
- C. T is largest for $\theta=0$.

Newton's laws in the direction along the rope :

$$T - mg \cos \theta = m \frac{v^2}{L}$$

For $\theta = 0$: $T = mg + m \frac{v^2}{L}$

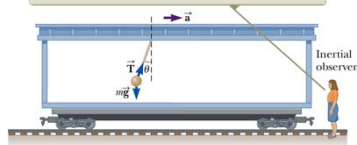
9/21/2012

PHY 113 A Fall 2012 -- Lecture 10

13

Newton's law in accelerating train car

An inertial observer at rest outside the car claims that the acceleration of the sphere is provided by the horizontal component of \vec{T} .



Vertical direction: $T \cos \theta - mg = 0$

Horizontal direction: $T \sin \theta = ma$

$$\Rightarrow \tan \theta = \frac{a}{g}$$

9/21/2012

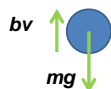
PHY 113 A Fall 2012 -- Lecture 10

14

Models of air friction forces

For small velocities: $F_{\text{air}} = -bv$

For larger velocities: $F_{\text{air}} = -Dv^2$



Denoting up direction as + and assuming $v < 0$:

$$-bv - mg = ma$$

Solution to differential equation :

$$-bv - mg = m \frac{dv}{dt}$$

$$v(t) = -\frac{mg}{b} (1 - e^{-bt/m})$$

9/21/2012

PHY 113 A Fall 2012 -- Lecture 10

15
